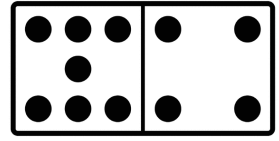




Name: \_\_\_\_\_ Date: \_\_\_\_\_

Fill in the missing numbers.



<b>Total</b>	
<b>Part</b>	<b>Part</b>

<b>Total</b>	
<b>Part</b>	<b>Part</b>

<b>Total</b>	
<b>Part</b>	<b>Part</b>

Fill in the missing numbers in the number grid.

51									
						67			

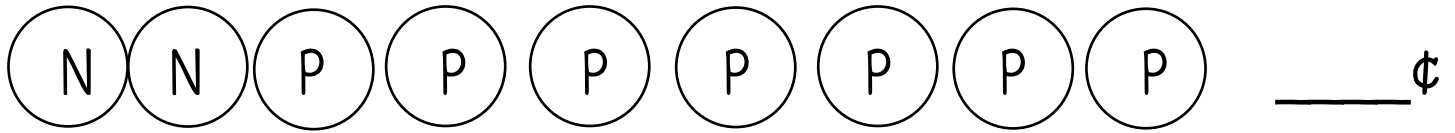
Draw the missing shape.



Circle the shorter one.

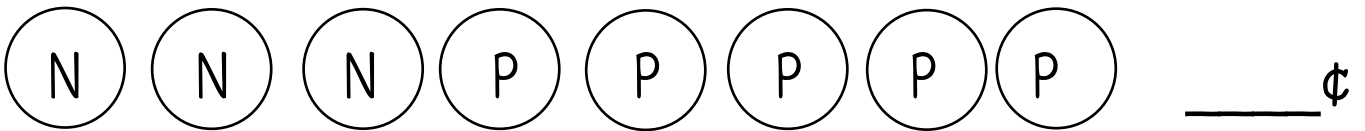


How much money?



Show the same amount using **fewer** coins.

How much money?



Show the same amount using **fewer** coins.

Solve.

$6 + 10 = \underline{\quad}$

$10 - 3 = \underline{\quad}$

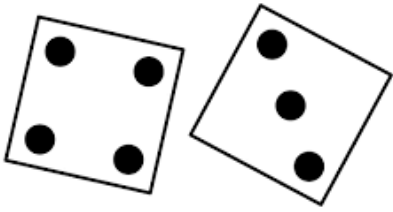
$5 + 5 = \underline{\quad}$

$7 + 6 = \underline{\quad}$


$12 - 7 = \underline{\quad}$

$9 + 3 = \underline{\quad}$

Write an addition fact to go with the dice.




$$\underline{\quad} + \underline{\quad} = \underline{\quad}$$



$$\underline{\quad} + \underline{\quad} = \underline{\quad}$$


Fill in the missing numbers.

<b>Rule</b>
Count back by 2s




A number line with five boxes. The first box contains the number 54. Four curved arrows point from each box to the box immediately to its left, indicating a sequence of four jumps of 2 units each.

<b>Rule</b>
-2



A number line with five boxes. The first box contains the number 22. Four curved arrows point from each box to the box immediately to its left, indicating a sequence of four jumps of 2 units each.


<b>Rule</b>



A number line with five boxes. The first box contains the number 30 and the second box contains the number 28. Four curved arrows point from each box to the box immediately to its left, indicating a sequence of four jumps of 2 units each.

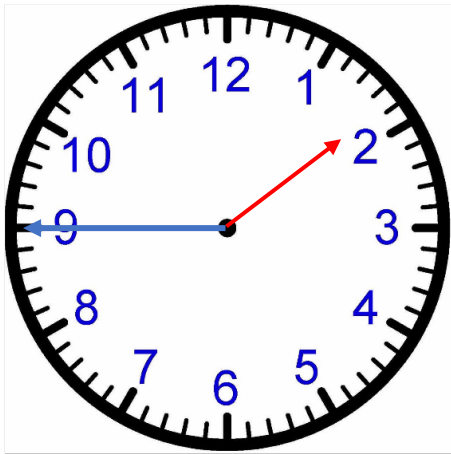
Create your own:

<b>Rule</b>

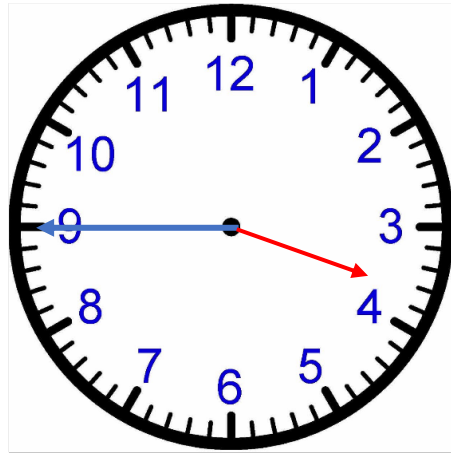


A number line with five empty boxes. Four curved arrows point from each box to the box immediately to its left, indicating a sequence of four jumps of 2 units each.

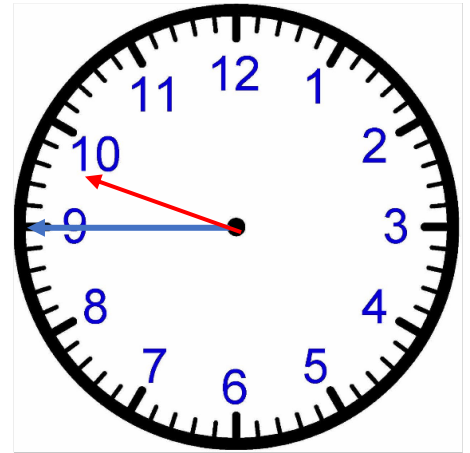
What time is it?



quarter-to      o'clock

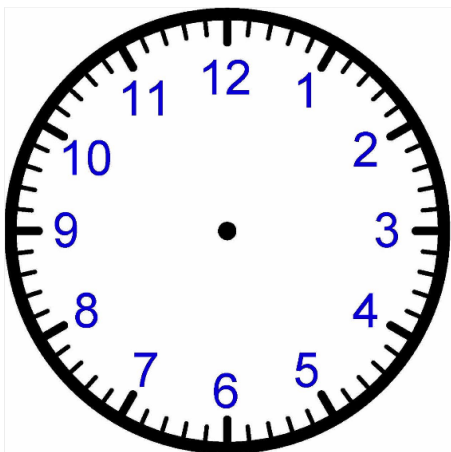


quarter-to      o'clock

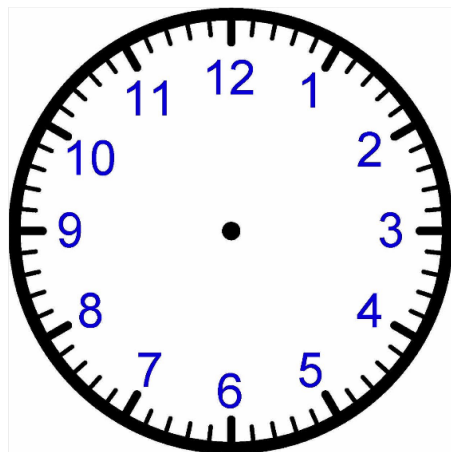


quarter-to      o'clock

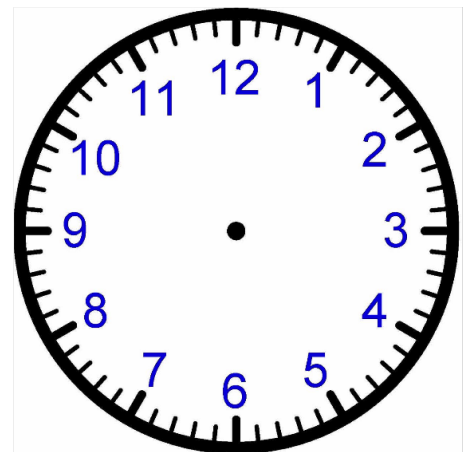
Draw the hour hand and the minute hand.



quarter-after 5 o'clock

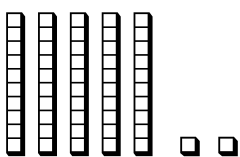


quarter-after 8 o'clock

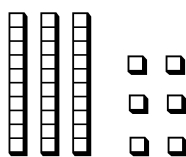


quarter-after 1 o'clock

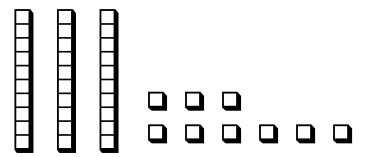
Write the number shown for each.



\_\_\_\_\_



\_\_\_\_\_



\_\_\_\_\_