

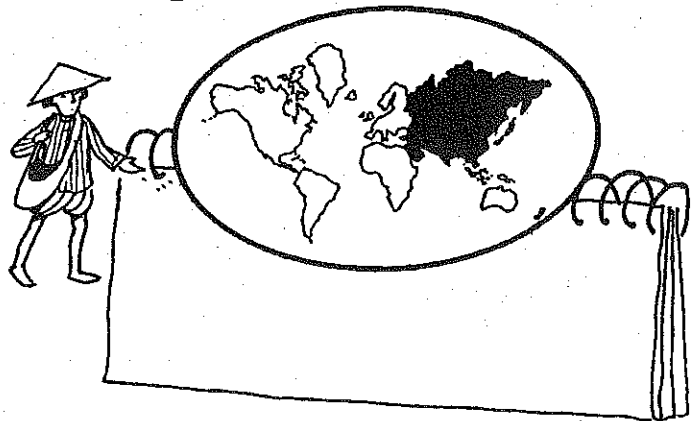
WHERE IN THE WORLD ... ?

Where in the world is Djibouti? And where, on earth, is Togo? If you don't know, track down a world atlas and find out!
 Write the names of the continents (or regions) shown in each map on these two pages (20 and 21).
 Write: North America, South America, Asia, Europe, Africa, and Australia & Oceania.
 Write the number of each nation into the correct box to match its continent (or region) location.


A.



B.



C.

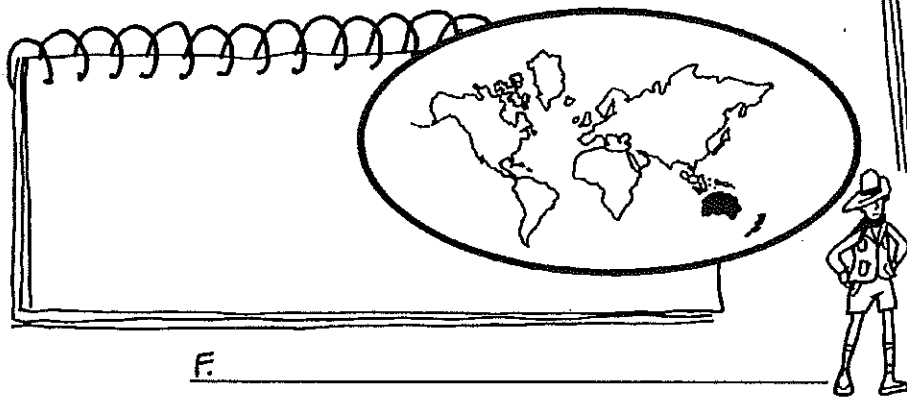

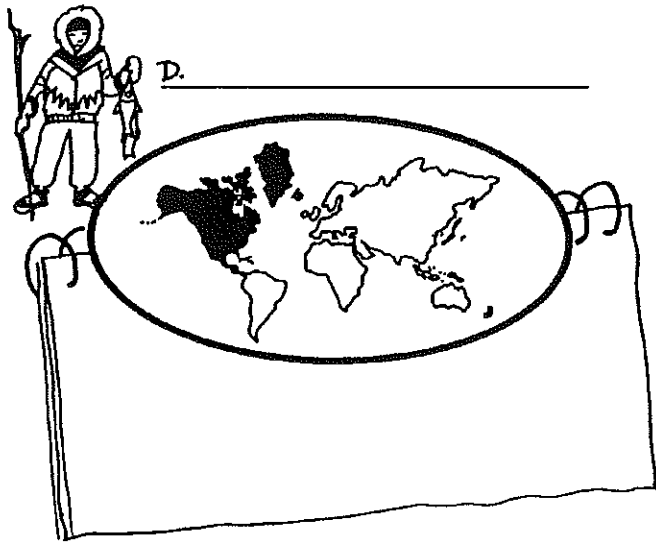


1. Afghanistan
2. Angola
3. Argentina
4. Austria
5. Bangladesh
6. Belgium
7. Bulgaria
8. Chile
9. Colombia
10. Congo
11. Costa Rica
12. Denmark
13. El Salvador
14. Ethiopia
15. Fiji

Use with page 21.

Name _____

Place each nation listed below in its correct continent location or regional location.
Write the number for the nation in the correct box.



- | | | |
|----------------|----------------------|--------------------|
| 16. Finland | 26. Nicaragua | 36. Sweden |
| 17. Germany | 27. Norway | 37. Taiwan |
| 18. Grenada | 28. Pakistan | 38. Togo |
| 19. Haiti | 29. Papua New Guinea | 39. Tunisia |
| 20. Jamaica | 30. Paraguay | 40. United Kingdom |
| 21. Kenya | 31. Saudi Arabia | 41. Venezuela |
| 22. Kuwait | 32. Sierra Leone | 42. Vietnam |
| 23. Luxembourg | 33. Singapore | 43. Yemen |
| 24. Malaysia | 34. Slovenia | 44. Zambia |
| 25. Mongolia | 35. South Korea | |

Use with page 20.

Name _____