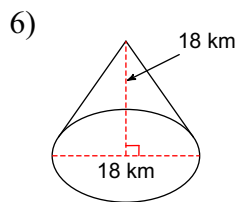
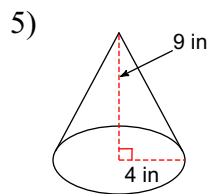
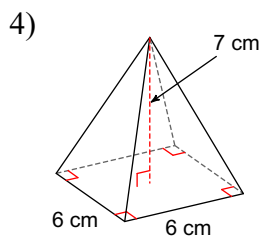
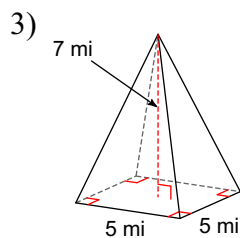
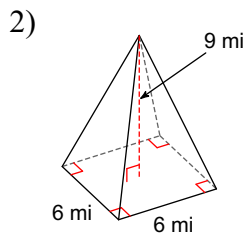
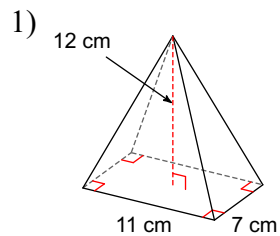
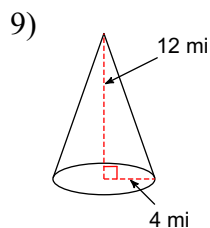
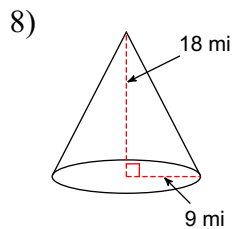
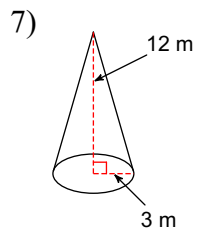


# Volume-Pyramid and Cone

**Find the volume of each figure. Round your answers to the nearest hundredth, if necessary.**



**Find the volume of each figure. Round your answers to the nearest hundredth, if necessary. Leave your answers in terms of  $\pi$  for answers that contain  $\pi$ .**



## Answers to Volume-Pyramid and Cone (ID: 1)

- |                         |                           |                         |                          |
|-------------------------|---------------------------|-------------------------|--------------------------|
| 1) $308 \text{ cm}^3$   | 2) $108 \text{ mi}^3$     | 3) $58.33 \text{ mi}^3$ | 4) $84 \text{ cm}^3$     |
| 5) $150.8 \text{ in}^3$ | 6) $1526.81 \text{ km}^3$ | 7) $36\pi \text{ m}^3$  | 8) $486\pi \text{ mi}^3$ |
| 9) $64\pi \text{ mi}^3$ |                           |                         |                          |