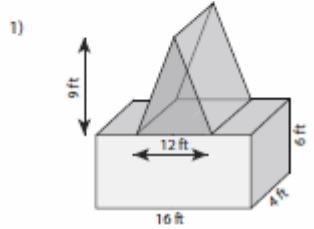


Name : _____

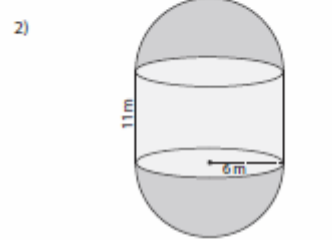
Score : _____

Volume - Compound Shapes

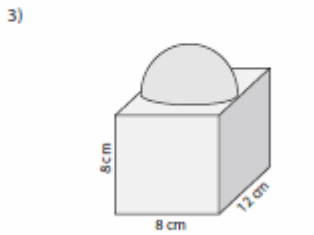
Find the volume of each figure. Round the answer to two decimal places. (use $\pi = 3.14$)



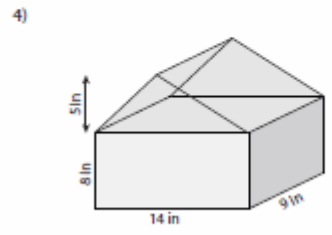
Volume = _____



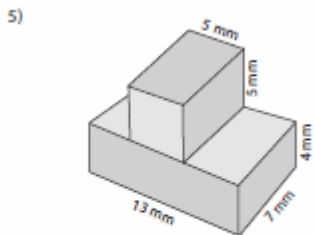
Volume = _____



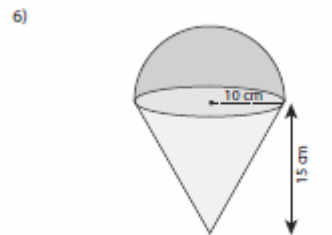
Volume = _____



Volume = _____



Volume = _____



Volume = _____