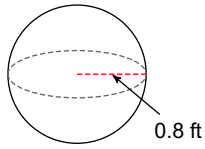


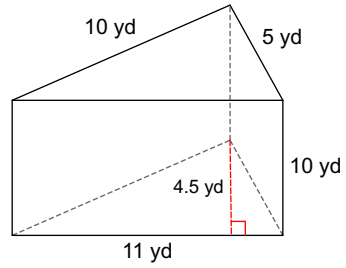
Volume-All Solids

Find the volume of each figure. Round your answers to the nearest hundredth, if necessary.

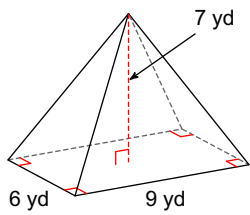
1)



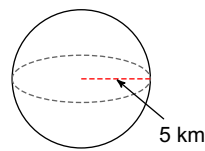
2)



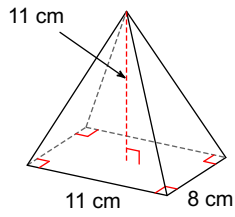
3)



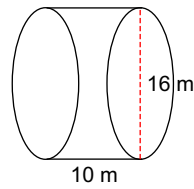
4)



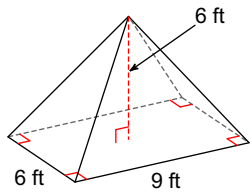
5)



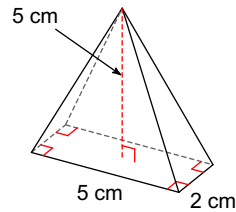
6)



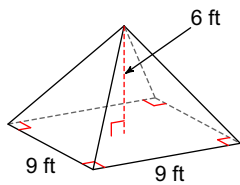
7)



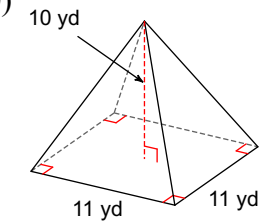
8)

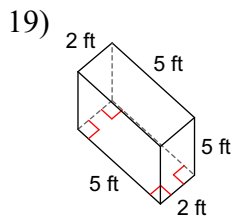
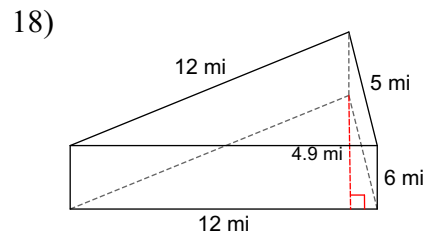
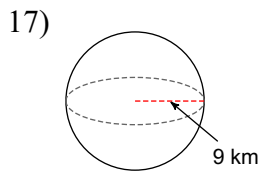
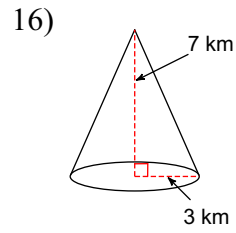
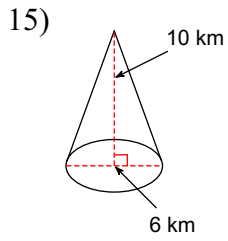
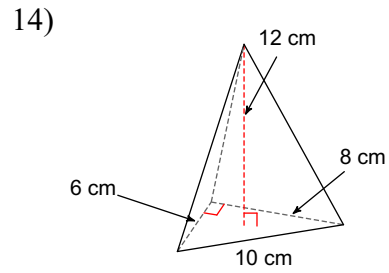
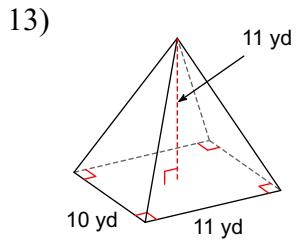
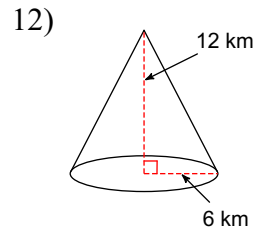
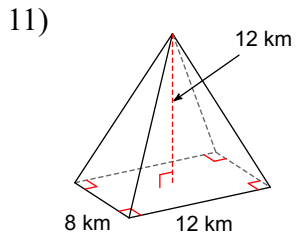


9)



10)





Answers to Volume-All Solids (ID: 1)

- | | | | |
|-----------------------------|----------------------------|---------------------------|----------------------------|
| 1) 2.14 ft ³ | 2) 247.5 yd ³ | 3) 126 yd ³ | 4) 523.6 km ³ |
| 5) 322.67 cm ³ | 6) 2010.62 m ³ | 7) 108 ft ³ | 8) 16.67 cm ³ |
| 9) 162 ft ³ | 10) 403.33 yd ³ | 11) 384 km ³ | 12) 452.39 km ³ |
| 13) 403.33 yd ³ | 14) 96 cm ³ | 15) 94.25 km ³ | 16) 65.97 km ³ |
| 17) 3053.63 km ³ | 18) 176.4 mi ³ | 19) 50 ft ³ | |