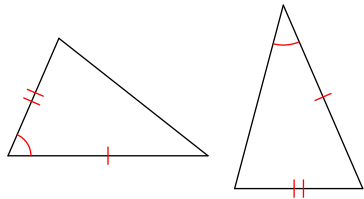


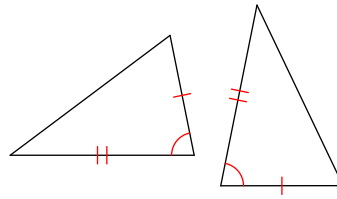
Assignment

State if the two triangles are congruent. If they are, state how you know.

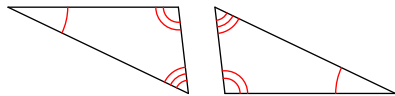
1)



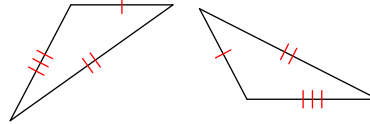
2)



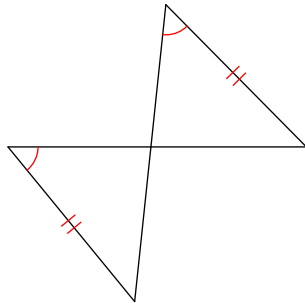
3)



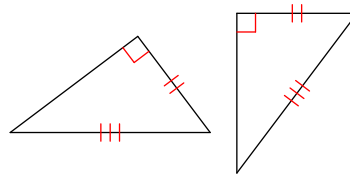
4)



5)



6)



Answers to Assignment (ID: 1)

1) Not congruent
5) AAS

2) SAS
6) HL

3) Not congruent

4) SSS