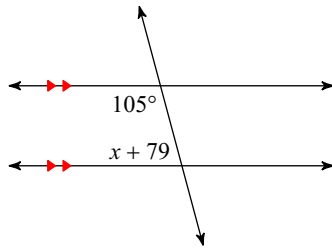


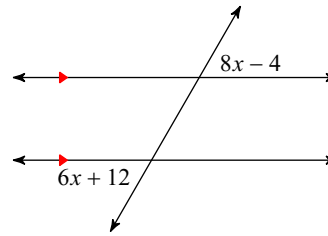
# Parallel Lines

Solve for  $x$ .

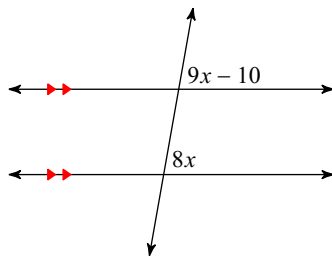
1)



2)



3)



## Answers to Parallel Lines (ID: 1)

1)  $-4$

2)  $8$

3)  $10$