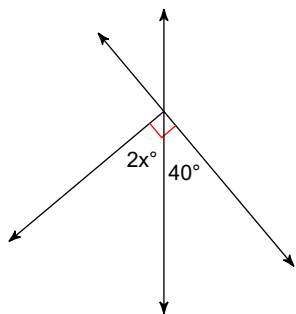


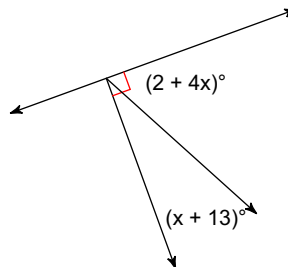
Angles

Find the value of x.

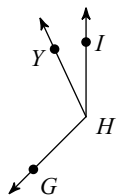
1)



2)

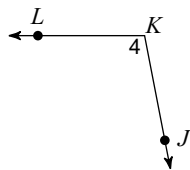


3) Find $m\angle YHI$ if $m\angle GHI = 135^\circ$ and $m\angle GHY = 110^\circ$.



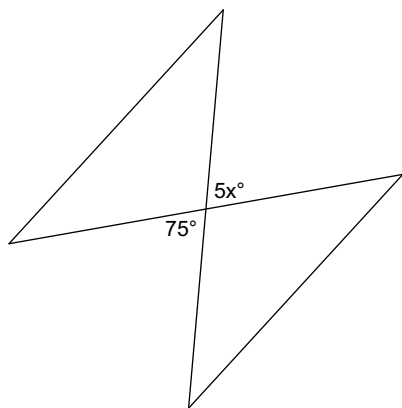
Name each angle in four ways.

4)



Find the value of x.

5)



Answers to Angles (ID: 1)

1) 25

2) 15

3) 25°

4) $\angle K, \angle 4, \angle JKL, \angle LKJ$

5) 15