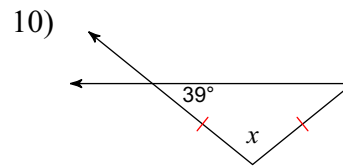
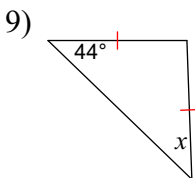
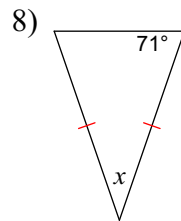
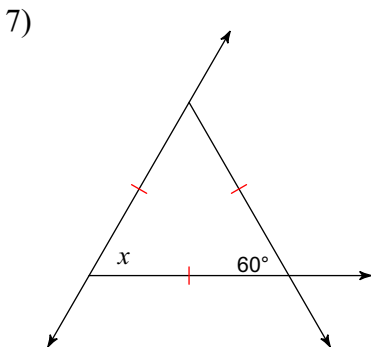
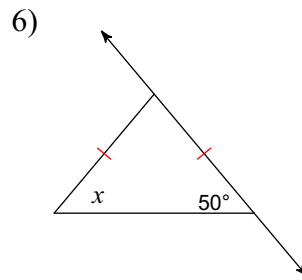
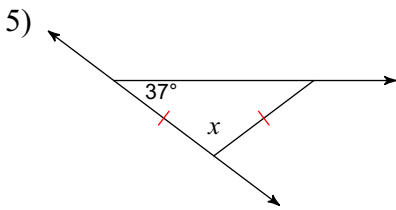
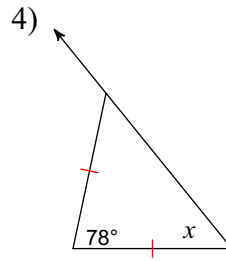
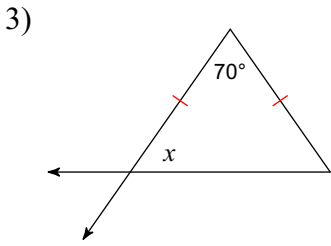
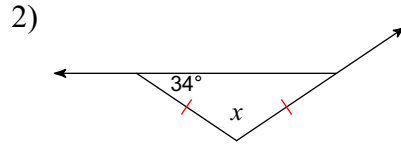
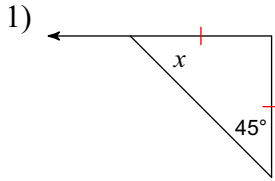


Assignment

Find the value of x .



Answers to Assignment (ID: 1)

- 1) 45°
- 5) 106°
- 9) 44°

- 2) 112°
- 6) 50°
- 10) 102°

- 3) 55°
- 7) 60°

- 4) 51°
- 8) 38°