

Name \_\_\_\_\_

Draw as many circles/stars as you can in 1 minute. Circle groups of 10.


<i>Tens</i>	<i>Ones</i>

How many groups of 10? \_\_\_\_\_

How many 1's left over? \_\_\_\_\_

# The Way We Write Our Numbers

Circle the objects into groups of 10. Then answer the questions: How many groups of ten did you have? How many were left over?



We write our numbers by putting them into groups of 10!


      
1

Groups of 10

      
2

Leftovers

Hey! That's the number 12!



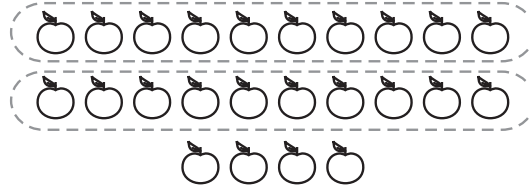
      
Groups of 10

      
Leftovers

Hey! That's the number \_\_\_\_\_!

# Counting: Tens and Ones

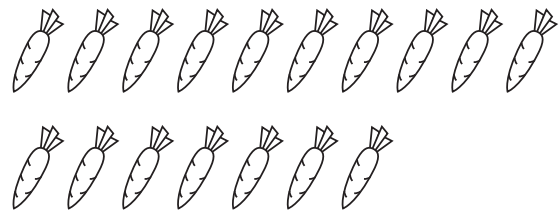
Circle each complete group of ten. Write how many tens, how many ones, and how many in all. For example:




  2   tens +   4   ones =  24 



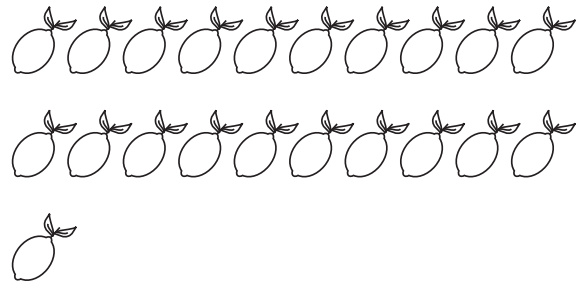
       tens +        ones =       




       tens +        ones =       



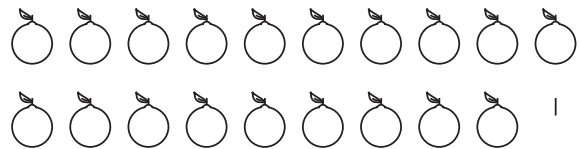
       tens +        ones =       



       tens +        ones =       



       tens +        ones =       



       tens +        ones =